

# Worksheet Level 3: Writing Linear Equations

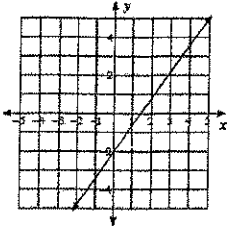
**Goals:**

I have mastered level 3 when I can:

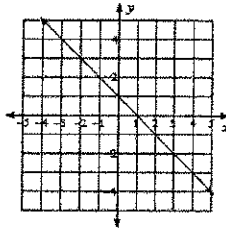
Write an equation from a graph

Write the slope-intercept form of the equation of each line.

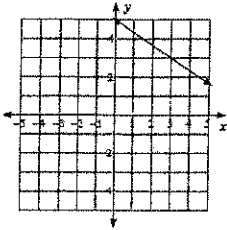
1)



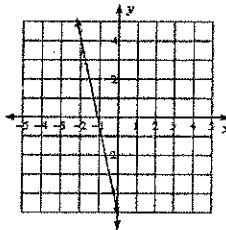
2)



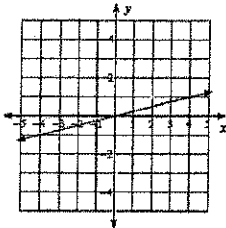
3)



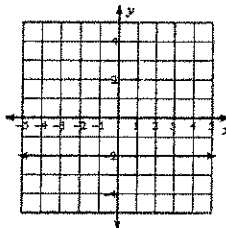
4)



5)



6)



Write an equation for each of the four lines shown on the graph below.

